

GATE 2022 General Aptitude (GA)

Q.1 – Q.5 Carry ONE mark each.

Q.1	Inhaling the smoke from a burning _____ could _____ you quickly.
(A)	tire / tier
(B)	tire / tyre
(C)	tyre / tire
(D)	tyre / tier

Q.2	A sphere of radius r cm is packed in a box of cubical shape. What should be the minimum volume (in cm^3) of the box that can enclose the sphere?
(A)	$\frac{r^3}{8}$
(B)	r^3
(C)	$2r^3$
(D)	$8r^3$



Q.3	<p>Pipes P and Q can fill a storage tank in full with water in 10 and 6 minutes, respectively. Pipe R draws the water out from the storage tank at a rate of 34 litres per minute. P, Q and R operate at a constant rate.</p> <p>If it takes one hour to completely empty a full storage tank with all the pipes operating simultaneously, what is the capacity of the storage tank (in litres)?</p>
(A)	26.8
(B)	60.0
(C)	120.0
(D)	127.5

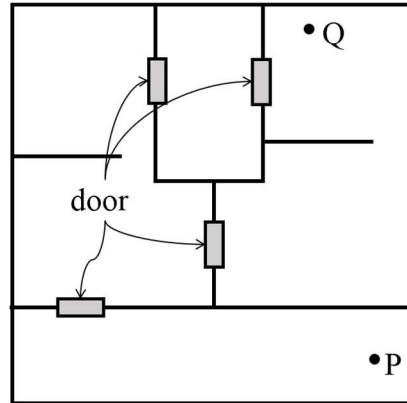


Q.4	<p>Six persons P, Q, R, S, T and U are sitting around a circular table facing the center not necessarily in the same order. Consider the following statements:</p> <ul style="list-style-type: none">• P sits next to S and T.• Q sits diametrically opposite to P.• The shortest distance between S and R is equal to the shortest distance between T and U. <p>Based on the above statements, Q is a neighbor of</p>
(A)	U and S
(B)	R and T
(C)	R and U
(D)	P and S

Q.5

A building has several rooms and doors as shown in the top view of the building given below. The doors are closed initially.

What is the minimum number of doors that need to be opened in order to go from the point P to the point Q?

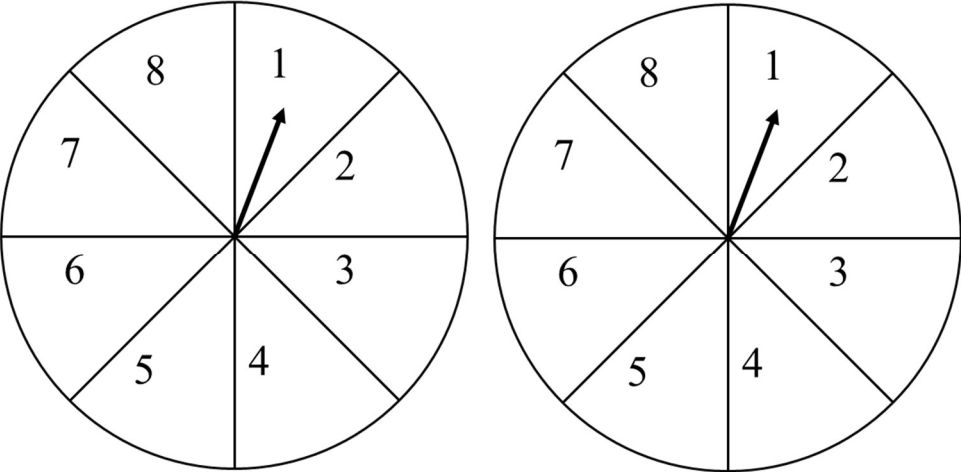


(A) 4

(B) 3

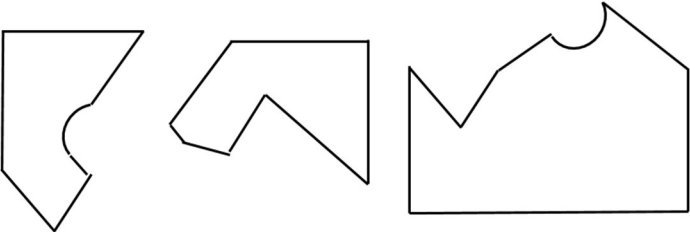
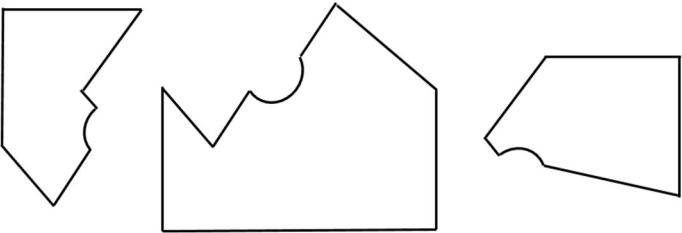
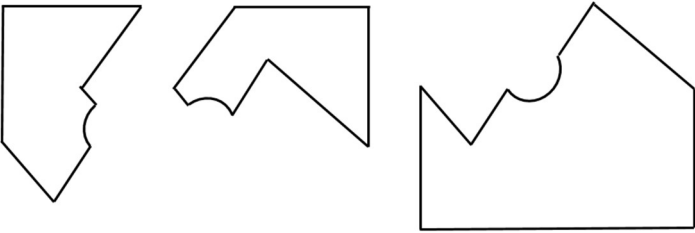
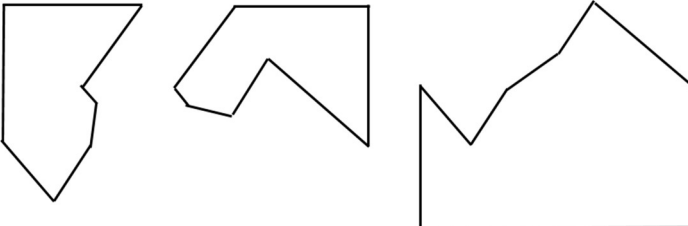
(C) 2

(D) 1

<p>Q.7</p>	<p>A game consists of spinning an arrow around a stationary disk as shown below. When the arrow comes to rest, there are eight equally likely outcomes. It could come to rest in any one of the sectors numbered 1, 2, 3, 4, 5, 6, 7 or 8 as shown.</p> <p>Two such disks are used in a game where their arrows are independently spun.</p> <p>What is the probability that the sum of the numbers on the resulting sectors upon spinning the two disks is equal to 8 after the arrows come to rest?</p> <div style="text-align: center;">  </div>
<p>(A)</p>	<p>$\frac{1}{16}$</p>
<p>(B)</p>	<p>$\frac{5}{64}$</p>
<p>(C)</p>	<p>$\frac{3}{32}$</p>
<p>(D)</p>	<p>$\frac{7}{64}$</p>



Q.8	<p>Consider the following inequalities.</p> <p>(i) $3p - q < 4$</p> <p>(ii) $3q - p < 12$</p> <p>Which one of the following expressions below satisfies the above two inequalities?</p>
(A)	$p + q < 8$
(B)	$p + q = 8$
(C)	$8 \leq p + q < 16$
(D)	$p + q \geq 16$

<p>Q.10</p>	<p>Which one of the following sets of pieces can be assembled to form a square with a single round hole near the center? Pieces cannot overlap.</p>
<p>(A)</p>	
<p>(B)</p>	
<p>(C)</p>	
<p>(D)</p>	

**GATE 2022 Agricultural Engineering (AG)****Q.11 – Q.35 Carry ONE mark Each**

Q.11	Determinant of a matrix remains unaltered if _____.
(A)	its columns and rows are interchanged
(B)	two parallel lines are identical
(C)	two parallel lines intersect
(D)	each element of a line is multiplied by the same factor
Q.12	The probability of having 53 Sundays in a randomly selected leap year is _____.
(A)	1/7
(B)	1/4
(C)	2/7
(D)	4/7



GATE 2022 Agricultural Engineering (AG)

Q.13	Function $f(x)$ by Maclaurin's series (as an infinite series) can be expressed as
(A)	$f(x) = f(1) + x f'(1) + \frac{x^2}{2!} f''(1) + \frac{x^3}{3!} f'''(1) + \dots + \infty$
(B)	$f(x) = f(0) + x f'(0) + \frac{x^2}{2!} f''(0) + \frac{x^3}{3!} f'''(0) + \dots + \infty$
(C)	$f(x) = f(1) - x f'(1) + \frac{x^2}{2!} f''(1) - \frac{x^3}{3!} f'''(1) + \dots + \infty$
(D)	$f(x) = f(0) - x f'(0) + \frac{x^2}{2!} f''(0) - \frac{x^3}{3!} f'''(0) + \dots + \infty$
Q.14	The lowest temperature at which the fuel ceases to flow is known as _____.
(A)	Pour point
(B)	Cloud point
(C)	Flash point
(D)	Boiling point



GATE 2022 Agricultural Engineering (AG)

Q.15	Complement of the Solar Altitude angle is _____.
(A)	Zenith angle
(B)	Azimuth angle
(C)	Hour angle
(D)	Profile angle
Q.16	Annual cost of owning (fixed cost) a particular combine harvester is Rs. 3,00,000 whereas, operating it would cost additional Rs. 6,000 per hectare. If an entrepreneur wishes to offer the machine for custom hiring, the combination of annual use (ha) and custom rate (Rs. ha ⁻¹), respectively, that would fetch him the break-even condition is _____.
(A)	200 and 7,500
(B)	210 and 6,300
(C)	180 and 9,200
(D)	250 and 6,100



GATE 2022 Agricultural Engineering (AG)

Q.17	In construction of gravel packed wells, the pack-aquifer ratio is generally defined as _____.
(A)	$\frac{50\% \text{ of the size of gravel pack}}{50\% \text{ of the size of aquifer}}$
(B)	$\frac{60\% \text{ of the size of gravel pack}}{10\% \text{ of the size of aquifer}}$
(C)	$\frac{50\% \text{ of the size of aquifer}}{50\% \text{ of the size of gravel pack}}$
(D)	$\frac{60\% \text{ of the size of aquifer}}{10\% \text{ of the size of gravel pack}}$
Q.18	The shape of falling limb of a hydrograph is dependent on _____.
(A)	basin and storm characteristics
(B)	storm characteristics only
(C)	basin characteristics only
(D)	direction of the rainfall only



GATE 2022 Agricultural Engineering (AG)

Q.19	Energy requirement (E) to produce a change (dX) in dimension X of a particular size can be expressed as $\frac{dE}{dX} = -\frac{c}{X^n}$ where, c is constant and n according to Rittinger's law is _____.
(A)	$\frac{1}{2}$
(B)	$\sqrt{2}$
(C)	$\frac{3}{2}$
(D)	2
Q.20	The ratio of inertial forces to viscous forces is known as _____.
(A)	Froude number
(B)	Reynolds number
(C)	Power number
(D)	Biot number
Q.21	The root of the equation $\sin x - 4x + 1 = 0$ after its first iteration, using Newton-Raphson method with an initial guess of $x_0 = 0.2$, is _____. [round off to three decimal places]
Q.22	The slope of the function $f(x) = 2x^4 - 3x^2 + 5x$ at $x = 2$ is _____. [Answer in integer]

GATE 2022 Agricultural Engineering (AG)

Q.23	A single cylinder four-stroke diesel engine has an engine displacement volume of 9 L, the engine rotates at 2400 rpm and its volumetric efficiency is 88%. The actual air inducted into the cylinder in $\text{m}^3 \text{s}^{-1}$ is _____. [round off to three decimal places]
Q.24	A two-wheel drive tractor is fitted with driving wheels having rolling radius of 860 mm. The effective gear ratio between the engine to the drive wheels is 98:1 and the power transmission efficiency at that gear ratio is 86%. If the engine torque is 520 N m, the ground thrust developed by the drive wheels in kN is _____. [round off to two decimal places]
Q.25	A double acting hydraulic cylinder has bore and rod diameter of 76 mm and 25 mm, respectively. In extension as well as retraction strokes of the cylinder, the oil flow rate to the cylinder from the pump is 40 L min^{-1} . The velocity of the piston during retraction stroke in m s^{-1} is _____. [round off to two decimal places] (Take $\pi = 3.14$)
Q.26	An open V-belt is wrapped around V-pulleys having effective diameters of 0.25 m and 0.65 m, and their centres are 1 m apart. Assuming ideal conditions, the wrap angle in degree for the smaller pulley is _____. [round off to two decimal places] (Take $\pi = 3.14$)
Q.27	Water from a confined aquifer having transmissivity of $1000 \text{ m}^2 \text{ day}^{-1}$ is pumped through a fully penetrating well of 300 mm diameter at a rate of $1200 \text{ m}^3 \text{ day}^{-1}$. If the radius of influence is 400 m, the drawdown in the well under steady-state flow condition in meter is _____. [round off to two decimal places] (Take $\pi = 3.14$)



GATE 2022 Agricultural Engineering (AG)

Q.33	If an osmo-dehydrated fruit slice has 72% moisture content on wet basis, the moisture content of the same fruit slice on dry basis in per cent is _____. [round off to one decimal place]
Q.34	If the specific heat capacity (c_p) of solids in potato is $837.36 \text{ J kg}^{-1} \text{ K}^{-1}$, then the specific heat capacity of potatoes in $\text{J kg}^{-1} \text{ K}^{-1}$ with 85% moisture content (wet basis) is _____. [round off to two decimal places]
Q.35	A milk sample contains 4×10^5 spores of <i>C. botulinum</i> (D value of 1.2 min at 121.1°C) and 7×10^6 spores of <i>L. monocytogenes</i> (D value of 0.9 min at 121.1°C) per mL. If the milk is heated at a uniform temperature of 121.1°C to obtain a probability of spoilage of 1 in 1000 cans, the minimum heating duration in minutes is _____. [round off to two decimal places]



GATE 2022 Agricultural Engineering (AG)

Q.36 – Q.65 Carry TWO marks Each

Q.36	The function $(x - 2)^2(x + 2)^2$ has
(A)	minima at +2 and maxima at -2
(B)	minima at -2 and maxima at +2
(C)	minima at -2 and +2
(D)	maxima at -2 and +2
Q.37	The matrix $\begin{bmatrix} (3-x) & 2 & 2 \\ 2 & (4-x) & 1 \\ -2 & -4 & (-1-x) \end{bmatrix}$ is singular for the following values of x
(A)	$x = 0$ and $x = 3$
(B)	$x = 0$ and $x = -3$
(C)	$x = 0$ and $x = 6$
(D)	$x = 0$ and $x = -6$

GATE 2022 Agricultural Engineering (AG)

Q.38	<p>A 5×20 cm seed drill has a ground drive wheel of rolling diameter 0.5 m. While testing under laboratory condition, 320 g of seeds were collected in 20 revolutions of the ground drive wheel. The same seed drill when operated in a 2 ha field, amount of seeds dropped was found to be 185 kg. The variation in the seed dropped between laboratory and field conditions due to skid of ground drive wheel is _____</p> <p>(Take $\pi = 3.14$)</p>
(A)	6.38%
(B)	9.23%
(C)	10.17%
(D)	12.26%
Q.39	<p>A 3.6 m combine harvester was tested over a crop strip of 20 m length and the following data were obtained while testing:</p> <p>Total material left over walker = 8.5 kg Free seed over walker = 100 g Unthreshed seed over walker = 50 g Total material left over shoe = 5.5 kg Free seed over shoe = 250 g Unthreshed seed over shoe = 80 g Total seed collected in the grain tank = 16.5 kg</p> <p>The grain yield (tonne ha^{-1}) and cylinder loss (%), respectively, are</p>
(A)	2.36 and 0.77
(B)	4.24 and 0.29
(C)	6.28 and 0.47
(D)	8.05 and 2.82



GATE 2022 Agricultural Engineering (AG)

Q.42	<p>A parabolic shaped grass-waterway is to be designed to carry a flow of $2.85 \text{ m}^3 \text{ s}^{-1}$ down the slope of 3%. The permissible velocity of water in the waterway is 1.78 m s^{-1}. If the freeboard depth is excluded, the most appropriate top width in m and depth in m, respectively are</p> <p>(Take Manning's roughness coefficient = 0.04)</p>
(A)	4 and 0.6
(B)	6 and 0.4
(C)	7 and 0.5
(D)	5.5 and 0.6
Q.43	<p>The pressure drop through a well-designed constriction is to be used for measuring the velocity of flow through a circular pipe. If the pressure drop from a 0.1 m diameter section to a 0.05 m diameter section of the pipe is 7.5 kPa, the velocity in m s^{-1} in the 0.1 m diameter section of the pipe is _____.</p> <p>(Take density of liquid = 1000 kg m^{-3})</p>
(A)	0.5
(B)	1.0
(C)	1.5
(D)	2.0



GATE 2022 Agricultural Engineering (AG)

Q.44	<p>The water activity of potato is 0.942. As per Raoult's law, the most efficient solution for osmotic dehydration of potato is _____.</p> <p>(Molar mass of sucrose = 342 g mole⁻¹, and NaCl = 58.5 g mole⁻¹)</p>
(A)	20% sucrose solution
(B)	20% NaCl solution
(C)	10% sucrose solution + 10% NaCl solution
(D)	15% sucrose solution + 5% NaCl solution
Q.45	<p>The mass fraction retained on the ith sieve is x_i and \overline{D}_{pi} is the average opening size of ith and (i-1)th sieves. The volume surface mean diameter (\overline{D}_s) of particles retained on n number of sieves is _____.</p>
(A)	$\overline{D}_s = \frac{1}{\sum_{i=1}^n \left(\frac{x_i}{\overline{D}_{pi}} \right)}$
(B)	$\overline{D}_s = \sum_{i=1}^n x_i \overline{D}_{pi}$
(C)	$\overline{D}_s = \left[\frac{1}{\sum_{i=1}^n \left(\frac{x_i}{\overline{D}_{pi}^3} \right)} \right]^{1/3}$
(D)	$\overline{D}_s = \left[\frac{1}{\sum_{i=1}^n \left(\frac{x_i}{\overline{D}_{pi}^3} \right)} \right]^{2/3}$

GATE 2022 Agricultural Engineering (AG)

Q.46	Match the following reactants in Column I with the most appropriate purpose used in processing as mentioned in Column II																							
	Column I				Column II																			
	I	Vitamin E	P	fumigant for insect killing																				
	II	Calcium salts	Q	reduces shrinkage losses																				
	III	Edible waxes	R	antioxidant with vitamin A in oils																				
	IV	Methyl Bromide	S	firming agent in fruits																				
(A)	I-P, II-S, III-Q, IV-R																							
(B)	I-R, II-Q, III-S, IV-P																							
(C)	I-P, II-Q, III-S, IV-R																							
(D)	I-R, II-S, III-Q, IV-P																							
Q.47	Work done by a moving particle in the force field $\vec{F} = 6x^2\hat{i} + (3xz + y)\hat{j} + 4z\hat{k}$, moving along the straight line from (0,0,0) to (1,2,3) is _____. [<i>Answer in integer</i>]																							
Q.48	The power consumption readings (in watt) by an instrument at fixed intervals of time (in seconds) are tabulated below:																							
	<table border="1" data-bbox="320 1762 1353 1861"> <tr> <td>Time (s)</td> <td>0.0</td> <td>0.6</td> <td>1.2</td> <td>1.8</td> <td>2.4</td> <td>3.0</td> <td>3.6</td> </tr> <tr> <td>Power consumption (W)</td> <td>8.6</td> <td>9.2</td> <td>7.8</td> <td>6.4</td> <td>7.2</td> <td>8.6</td> <td>11.2</td> </tr> </table>								Time (s)	0.0	0.6	1.2	1.8	2.4	3.0	3.6	Power consumption (W)	8.6	9.2	7.8	6.4	7.2	8.6	11.2
Time (s)	0.0	0.6	1.2	1.8	2.4	3.0	3.6																	
Power consumption (W)	8.6	9.2	7.8	6.4	7.2	8.6	11.2																	
	Using Simpson's 1/3 rd rule, the energy expenditure of the instrument in joule is _____. [<i>round off to two decimal places</i>]																							

GATE 2022 Agricultural Engineering (AG)

Q.49	<p>The root mean square acceleration for mechanical vibration of a tractor is 3.15 m s^{-2} and its frequency is 80 Hz. The root mean square amplitude of the vibration in μm is _____. [round off to two decimal places]</p> <p>(Take $\pi = 3.14$)</p>
Q.50	<p>The static weight on front and rear axles of a two-wheel drive tractor are 3 kN and 9 kN, respectively. The wheel-base of the tractor is 2.1 m and the tractor pulls a load of 7.5 kN. The perpendicular distance from the front wheel ground contact point to the line of pull is 680 mm. Neglecting the wheel contact off-set on the ground, the weight transfer onto the rear axle in kN is _____. [round off to two decimal places]</p>
Q.51	<p>The crank radius and connecting rod length of an IC engine are 250 mm and 1000 mm, respectively. If the crank turns 100° from the head dead centre and the net force acting on the piston along its direction of motion is 35 kN, the turning moment of the crank shaft at that instant in kN m is _____. [round off to two decimal places]</p>
Q.52	<p>An engine develops 42 kW brake power when it runs with B20 fuel (80% biodiesel and 20% diesel by volume) with a brake thermal efficiency of 24%. The heating value of the fuel is 46.15 MJ kg^{-1} and its density is 0.845 kg L^{-1}. The fuel consumption of the engine in L h^{-1} will be _____. [round off to two decimal places]</p>
Q.53	<p>A tractor operated $12 \times 60 \text{ cm}$ boom sprayer had an overlap of 30 cm between the successive passes during field operation at an average speed of 4.2 km h^{-1}. A total time loss of 7.5 min ha^{-1} was observed during turnings. Assuming no overlap of spray material between adjacent nozzles, the field efficiency of the sprayer in per cent is _____. [round off to two decimal places]</p>

GATE 2022 Agricultural Engineering (AG)

<p>Q.54</p>	<p>A mild steel flange-mounted single shear pin (Ultimate shear strength = 42 MPa) of 10 mm diameter is used in a flange. The perpendicular distance between the axis of driving shaft and the shear pin axis is 100 mm. If the speed of the driving shaft is 300 rpm, the maximum power the shaft could transmit in kW before the failure of the pin is _____. [<i>round off to two decimal places</i>]</p> <p>[Take $\pi = 3.14$]</p>															
<p>Q.55</p>	<p>In a subsurface drainage network, 12 lateral drains each of 100 m long are laid at a spacing of 50 m. These lateral drains are connected to a collector drain. When the water table dropped 50 cm below the soil surface in 4 days, the average discharge at the outlet of the collector drain was found to be 12 L s^{-1}. The average drainable porosity of soil in per cent is _____. [<i>round off to two decimal places</i>]</p>															
<p>Q.56</p>	<p>A watershed with various land uses (as specified in the table below) receives a rainfall of 152.4 mm. If an initial abstraction (I_a) is 0.2 times the potential maximum retention (S), and the antecedent moisture content (AMC) of averaged condition is assumed, the depth of runoff volume in mm is _____. [<i>round off to two decimal places</i>]</p>															
	<table border="1"> <thead> <tr> <th data-bbox="320 1211 807 1283">Land use (%)</th> <th data-bbox="807 1211 1031 1283">Soil group</th> <th data-bbox="1031 1211 1390 1283">Curve number</th> </tr> </thead> <tbody> <tr> <td data-bbox="320 1283 807 1355">Residential, 40%</td> <td data-bbox="807 1283 1031 1355">C</td> <td data-bbox="1031 1283 1390 1355">83</td> </tr> <tr> <td data-bbox="320 1355 807 1426">Open space- good condition, 25%</td> <td data-bbox="807 1355 1031 1426">D</td> <td data-bbox="1031 1355 1390 1426">80</td> </tr> <tr> <td data-bbox="320 1426 807 1498">Commercial and business, 20%</td> <td data-bbox="807 1426 1031 1498">C</td> <td data-bbox="1031 1426 1390 1498">94</td> </tr> <tr> <td data-bbox="320 1498 807 1563">Industrial, 15%</td> <td data-bbox="807 1498 1031 1563">D</td> <td data-bbox="1031 1498 1390 1563">93</td> </tr> </tbody> </table>	Land use (%)	Soil group	Curve number	Residential, 40%	C	83	Open space- good condition, 25%	D	80	Commercial and business, 20%	C	94	Industrial, 15%	D	93
Land use (%)	Soil group	Curve number														
Residential, 40%	C	83														
Open space- good condition, 25%	D	80														
Commercial and business, 20%	C	94														
Industrial, 15%	D	93														
<p>Q.57</p>	<p>A trapezoidal weir has a side slope of 1 horizontal unit to 4 vertical units. The length of the weir is less than the width of the channel. If the head over the weir is 70 cm and the discharge is $0.85 \text{ m}^3 \text{ s}^{-1}$, the length of the weir in m is _____. [<i>round off to two decimal places</i>]</p> <p>(Take coefficient of discharge = 0.62 and $g = 9.81 \text{ m s}^{-2}$)</p>															



GATE 2022 Agricultural Engineering (AG)

<p>Q.62</p>	<p>Parboiled paddy is to be dried in a tray dryer under steady state conditions from an initial free moisture content of $0.40 \text{ kg H}_2\text{O (kg dry solid)}^{-1}$ to final free moisture content of $0.02 \text{ kg H}_2\text{O (kg dry solid)}^{-1}$. The dry solid mass is 99.8 kg and the top surface area for drying is 4.654 m^2. The drying is occurring in both constant and falling rate periods. If constant drying rate of $1.51 \text{ kg H}_2\text{O m}^{-2} \text{ h}^{-1}$ is followed up to a critical moisture content of $0.195 \text{ kg H}_2\text{O (kg dry solid)}^{-1}$, then the total drying time in hour will be _____. [round off to two decimal places]</p>									
<p>Q.63</p>	<p>Sweet sorghum with an initial average particle size of 4.0 mm was pulverized using a burr mill at two different gap settings between stones. The average feed rate of the material is 200 kg h^{-1}. The resultant flour was analyzed by IS sieves for particle size determination and was found to be 0.336 mm and 0.306 mm for the first and second gap settings, respectively. Using Kick's law, if the power required to grind the sorghum at first setting is 7.2 kW, the power requirement in kW with the second setting is _____. [round off to two decimal places]</p>									
<p>Q.64</p>	<p>A walk-in deep freezer wall is made of 120 mm thick brick layer on the outside followed by 75 mm thick concrete and 50 mm thick cork layers inside. The mean temperatures measured over inside and outside wall surfaces are $-18 \text{ }^\circ\text{C}$ and $24 \text{ }^\circ\text{C}$, respectively. The thermal conductivity of brick, concrete and cork are 0.69, 0.76 and $0.043 \text{ W m}^{-1} \text{ K}^{-1}$, respectively. Considering one square meter wall surface area, the heat transfer rate in W is _____. [round off to one decimal place]</p>									
<p>Q.65</p>	<p>In an effort to conserve energy, a grain dryer is being modified to reuse a part ($10 \text{ m}^3 \text{ s}^{-1}$) of the exhaust airflow at $70 \text{ }^\circ\text{C}$ and 30% relative humidity. This part of exhaust is mixed with $20 \text{ m}^3 \text{ s}^{-1}$ of ambient air at $30 \text{ }^\circ\text{C}$ and 60% relative humidity. The details of the two air-stream conditions are given below.</p> <table border="1" data-bbox="454 1637 1252 1794"> <thead> <tr> <th>Temperature ($^\circ\text{C}$)</th> <th>Relative humidity (%)</th> <th>Absolute humidity ($\text{kg H}_2\text{O (kg dry air)}^{-1}$)</th> </tr> </thead> <tbody> <tr> <td>70</td> <td>30</td> <td>63.35×10^{-3}</td> </tr> <tr> <td>30</td> <td>60</td> <td>16×10^{-3}</td> </tr> </tbody> </table> <p>The absolute humidity of the mixed air will be _____. [round off to three decimal places]</p>	Temperature ($^\circ\text{C}$)	Relative humidity (%)	Absolute humidity ($\text{kg H}_2\text{O (kg dry air)}^{-1}$)	70	30	63.35×10^{-3}	30	60	16×10^{-3}
Temperature ($^\circ\text{C}$)	Relative humidity (%)	Absolute humidity ($\text{kg H}_2\text{O (kg dry air)}^{-1}$)								
70	30	63.35×10^{-3}								
30	60	16×10^{-3}								



Q. No.	Session	Question Type	Subject Name	Key/Range	Mark (MK)
1	4	MCQ	GA	C	1
2	4	MCQ	GA	D	1
3	4	MCQ	GA	C	1
4	4	MCQ	GA	C	1
5	4	MCQ	GA	C	1
6	4	MCQ	GA	B	2
7	4	MCQ	GA	D	2
8	4	MCQ	GA	A	2
9	4	MCQ	GA	C	2
10	4	MCQ	GA	C	2
11	4	MCQ	AG	A	1
12	4	MCQ	AG	C	1
13	4	MCQ	AG	B	1
14	4	MCQ	AG	A	1
15	4	MCQ	AG	A	1
16	4	MCQ	AG	A	1
17	4	MCQ	AG	A	1
18	4	MCQ	AG	C	1
19	4	MCQ	AG	D	1
20	4	MCQ	AG	B	1
21	4	NAT	AG	0.250 to 0.350	1
22	4	NAT	AG	57 to 57	1
23	4	NAT	AG	0.157 to 0.159	1
24	4	NAT	AG	50.95 to 50.97	1
25	4	NAT	AG	0.14 to 0.18	1
26	4	NAT	AG	156.00 to 158.00	1
27	4	NAT	AG	1.48 to 1.53	1
28	4	NAT	AG	88.40 to 88.50	1
29	4	NAT	AG	3.42 to 3.46	1
30	4	NAT	AG	4.35 to 4.45	1
31	4	NAT	AG	29.90 to 29.95	1
32	4	NAT	AG	2.00 to 2.04	1
33	4	NAT	AG	256.5 to 257.5	1
34	4	NAT	AG	3678.00 to 3698.00	1
35	4	NAT	AG	10.20 to 10.40	1
36	4	MCQ	AG	C	2
37	4	MCQ	AG	A	2
38	4	MCQ	AG	B	2
39	4	MCQ	AG	A	2
40	4	MCQ	AG	D	2
41	4	MCQ	AG	B	2
42	4	MCQ	AG	B	2
43	4	MCQ	AG	B	2
44	4	MCQ	AG	B	2



45	4	MCQ	AG	A	2
46	4	MCQ	AG	D	2
47	4	NAT	AG	28 to 28	2
48	4	NAT	AG	29.20 to 29.50	2
49	4	NAT	AG	12.20 to 12.80	2
50	4	NAT	AG	2.30 to 2.60	2
51	4	NAT	AG	8.00 to 8.50	2
52	4	NAT	AG	14.00 to 18.00	2
53	4	NAT	AG	69.00 to 71.00	2
54	4	NAT	AG	10.20 to 10.50	2
55	4	NAT	AG	13.75 to 13.85	2
56	4	NAT	AG	111.80 to 112.00	2
57	4	NAT	AG	0.78 to 0.81	2
58	4	NAT	AG	33.60 to 33.70	2
59	4	NAT	AG	18.90 to 19.10	2
60	4	NAT	AG	0.165 to 0.172	2
61	4	NAT	AG	23.80 to 24.50	2
62	4	NAT	AG	9.20 to 9.30	2
63	4	NAT	AG	7.40 to 7.55	2
64	4	NAT	AG	29.0 to 30.0	2
65	4	NAT	AG	0.028 to 0.032	2